



बसंत वैली पब्लिक स्कूल  
पुनरावृत्ति अभ्यास कार्य 2017-18  
विषय – हिन्दी

कक्षा – तीन

प्र 1. अपने आस पास के वातावरण से संबन्धित पाँच संज्ञा शब्द लिखो।

1. ....
2. ....
3. ....
4. ....
5. ....

प्र 2. सही मिलान करो।

| (क)   | (ख)    |
|-------|--------|
| सेठ   | बकरा   |
| बकरी  | सेठानी |
| तेलिन | बालिका |
| लड़की | तेली   |
| बालक  | लड़का  |

प्र 3. वचन बदलो –

- 1) बहन – .....
- 2) नदी – .....
- 3) माला – .....
- 4) तोता – .....
- 5) बच्चा – .....

प्र 4. उल्टे शब्द करो।

- 1) वीर – .....
- 2) दोस्त – .....





BASANT VALLEY PUBLIC SCHOOL  
PLOT NO -119, SEC - 46, GURGAON  
REVISION WORKSHEET - 2017-18  
SUBJECT - Computer

CLASS - 3<sup>rd</sup>

Q.1. Tick the correct answer -

- 1) The first program loaded when you turn on the computer.
  - a) Application software
  - b) Operation system software
  - c) MS-word
  - d) Calculator
- 2) The small pictures that appears on the desktop -
  - a) Icons
  - b) taskbar
  - c) start button
- 3) A small arrow on the screen -
  - a) Mouse
  - b) Icon mouse pointer
- 4) The tab that contains the editing tools -
  - a) Home tab
  - b) View tab
  - c) Quick tab

Q.2. State true or false -

- a) Quick access toolbar is present on the little bar. ( )
- b) Zoom tool is used to cut the selected part of an image. ( )
- c) Curve tool is used to draw straight lines. ( )
- d) Flip command is used to see the mirror image of the picture. ( )

Q.3. Fill in the blanks -

- 1) The latest version of an operating system is \_\_\_\_\_
- 2) \_\_\_\_\_ Shows the programs which are currently opened.
- 3) Software is a set of \_\_\_\_\_ that tells \_\_\_\_\_ what to do.
- 4) \_\_\_\_\_ is a software program specially designed entertainment.

Q.4. Match the following -



Recycle bin



Network



Internet Explorer



Computer

Q.5. Draw the following tools -

1) Brush tool

2) Line tool

3) Text tool

4) Eraser tool

Q.6. Answer the following questions -

1) What are resize and skew commands used for?

Ans. \_\_\_\_\_  
\_\_\_\_\_

2) Define Icons -

Ans. \_\_\_\_\_  
\_\_\_\_\_

3) Define the desktop -

Ans. \_\_\_\_\_  
\_\_\_\_\_

4) Compare hardware and software in two points -

Ans. \_\_\_\_\_  
\_\_\_\_\_

5) What do we use zoom tool?

Ans. \_\_\_\_\_  
\_\_\_\_\_



BASANT VALLEY PUBLIC SCHOOL  
PLOT NO -119, SEC - 46, GURGAON  
REVISION WORKSHEET - 2017-18  
SUBJECT - Science

CLASS - 3<sup>rd</sup>

**Q.1. Fill in the blanks:**

1. Ostrich can fight with its \_\_\_\_\_
2. A bird may use its \_\_\_\_\_ & \_\_\_\_\_ to protect itself from enemies.
3. \_\_\_\_\_ lay egg in the nests of other birds.
4. An eagle builds its nest on high \_\_\_\_\_, like a large tree or cliff.
5. Kidneys removes \_\_\_\_\_ from the body.
6. The portion of the food that remains undigested enter the \_\_\_\_\_

**Q.2. Name them -**

- a) Kidneys, lungs, Skin
- 

- b) Builds tiny nests & lines it with spider webs.
- 

- c) A bird with talons.
- 

**Q.3. Match the following:**

(A)

Blood vessels  
Saliva  
Teeth  
Pouch like beak  
Flightless bird

(B)

grind food  
Pelican  
Carry blood  
Penguin  
Softens the food

**Q.4. Very short answer type questions:**

1. Name any two protein rich food?

---

2. What is the function of tongue in our mouth?

---

3. What do you mean by down stroke movement?

---

**Q.4. Short answer type questions:**

1. Define the following:

a) Excretory system

b) Migration

---

---

---

---

2. Differentiate the following:

a) Internal & external organ

b) Needle like beak & chisel like beak

---

---

---

---

3. What materials do birds use to build nest?

---

---

4. What makes skeletal system important for the body?

---




BASANT VALLEY PUBLIC SCHOOL  
PLOT NO -119, SEC - 46, GURGAON  
REVISION WORKSHEET - 2017-18  
SUBJECT - English

CLASS - 3<sup>rd</sup>

**Section - A, Reading**

**Q.1. Read the following passage carefully and answer the questions that follow -**

**Peacock**



The peacock is the national bird of India. The female is called the peahen which doesn't look as beautiful as a peacock. Indians believe that peacock's feathers bring good luck. Lizards and snakes are afraid of peacocks. The peacocks spread their beautiful tail fully and dance before monsoons. They can sense the presence of lions and tigers and move away for its safety.

A) What do we call its female?

Ans. \_\_\_\_\_

B) What is the belief of the Indians about its feathers?

Ans. \_\_\_\_\_

C) What do they do before monsoons?

Ans. \_\_\_\_\_



**Section - B, Grammar**

Q.2. A) Look at the picture carefully and write some 10 sentences, describing the picture -



Ans. \_\_\_\_\_  
\_\_\_\_\_  
\_\_\_\_\_  
\_\_\_\_\_  
\_\_\_\_\_  
\_\_\_\_\_

Q.3. Complete the story by filling up the blanks with the help of the words given in the helping box.

(angry, caught, den, mercy, cut, roared)

**The Lion and the mouse**

Once a lion was sleeping before its den. A mouse came out of its \_\_\_\_\_ and started playing on it. The lion got \_\_\_\_\_ and caught the mouse. But the mouse pleaded for \_\_\_\_\_. After some days the lion was \_\_\_\_\_ in a hunter's net. It \_\_\_\_\_ Hearing the lion's roar the mouse ran to the place, \_\_\_\_\_ the net and freed the lion. They \_\_\_\_\_ friends.

**Section - D, Literature**

Q.4. Give the meanings of -

- 1) Scampered - \_\_\_\_\_
- 2) Drought - \_\_\_\_\_



BASANT VALLEY PUBLIC SCHOOL  
PLOT NO -119, SEC - 46, GURGAON  
REVISION WORKSHEET - 2017-18  
SUBJECT - Maths

CLASS - 3<sup>rd</sup>

**Q.1. Arrange the column & add -**

1) 1095 and 2345 =

2) 6374 and 2518 =

**Q.2. Arrange the column & subtract -**

1) 3569 and 6007 =

2) 2526 and 8431 =

**Q.3. A supermarket sells 1048 eggs in the first week and 1536 in the second week of March. How many eggs does the supermarket sell in total?**

---

---

---

---

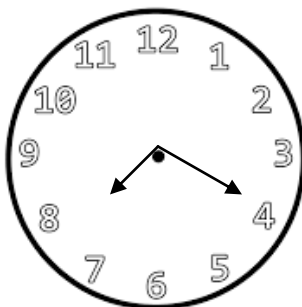
**Q.4. Maya's mother had Rs. 9730 in her bank account. She takes out Rs. 5550 to buy things. How much money is left in her bank account?**

---

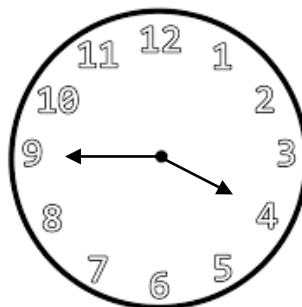
---

---

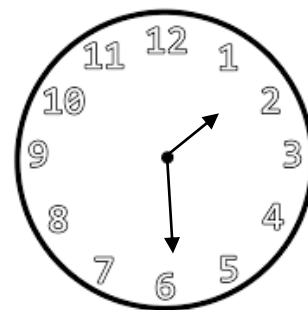
**Q.5. Write the time -**



---

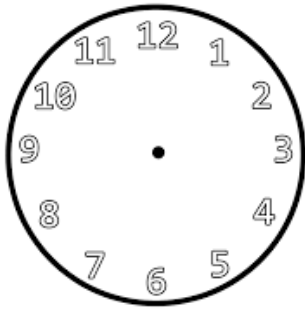


---

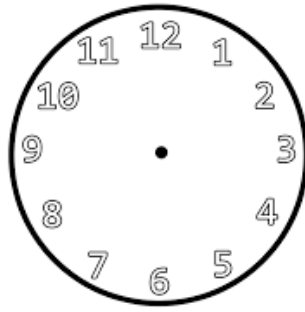


---

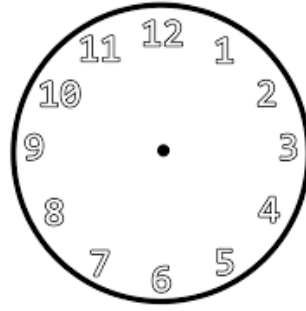
Q.6. Draw the hands to indicate the time and also write the time.



Quarter past 8

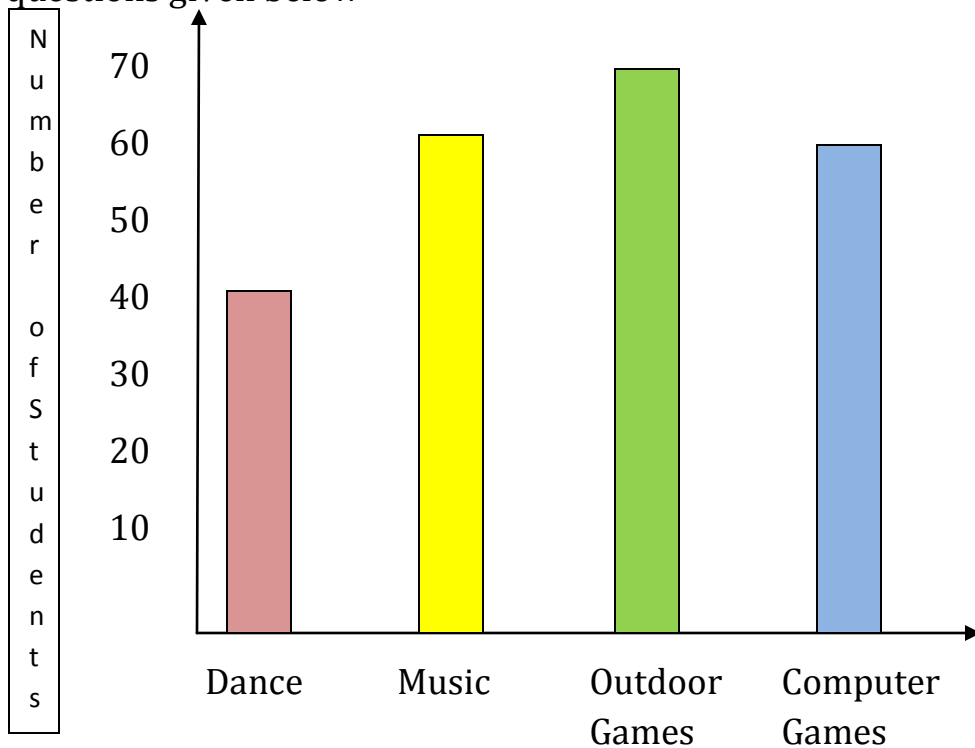


quarter to 9



10 minutes past 10

Q.7. Student of class 3<sup>rd</sup> was asked about their hobbies. Look at the bar graph and answer the questions given below -



- Which is the least popular hobby? \_\_\_\_\_
- Which two hobbies are equally popular? \_\_\_\_\_ and \_\_\_\_\_
- How many students like outdoor games as a hobby? \_\_\_\_\_
- Write true or false -
  - Number of students who like outdoor games is equal to the number of students who like music. (      )
  - Number of students who like dance as a hobby is half of the number of students who like outdoor games. (      )
  - Number of students who like computer games is 60. (      )



BASANT VALLEY PUBLIC SCHOOL  
PLOT NO -119, SEC - 46, GURGAON  
REVISION WORKSHEET - 2017-18  
SUBJECT - SST

CLASS - 3<sup>rd</sup>

**Q.1. Fill in the blanks:**

- 1) Earth revolves on an imaginary \_\_\_\_\_
- 2) \_\_\_\_\_ and \_\_\_\_\_ hills form the northern part of the Plateau Region.

**Q.2. True/False -**

- 1) The Great Indian Desert is heavily populated. (            )
- 2) The union territories are ruled by their Chief Ministers.(            )

**Q.3. One word answer -**

- 1) Where do the chief Ministers of different states live?

Ans. \_\_\_\_\_

- 2) Which two hills shelter the coastal plains?

Ans. \_\_\_\_\_

- 3) Through which place the 0° Meridian is drawn?

Ans. \_\_\_\_\_

**Q.4. Give elaborate answers -**

- 1) Name the physical features of India.

Ans. \_\_\_\_\_

\_\_\_\_\_

- 2) Describe the Northern plains.

Ans. \_\_\_\_\_

\_\_\_\_\_

- 3) A note on Indian Government.

Ans. \_\_\_\_\_

---

---

---

4) Name the capitals of the following states.

1) Haryana - \_\_\_\_\_

2) Tamil Naidu - \_\_\_\_\_

3) Kerala - \_\_\_\_\_

4) Goa - \_\_\_\_\_

5) Assam - \_\_\_\_\_

6) Uttara Khand - \_\_\_\_\_

Q.5. Give short notes on any one of the following -

1) What type of climate is there in the Gangetic Plains

Ans. \_\_\_\_\_

---

---

---

---

---

Or

2) Give a short note on the states.

Ans. \_\_\_\_\_

---

---

---

---

---